


Der beste Zug


Weiss am Zug. Welcher der drei vorgeschlagenen Züge ist der Beste?

1




□ ♖g6+ □ ♜f3 □ ♔h1

5




□ ♔g5 □ h4 □ ♕e6

9



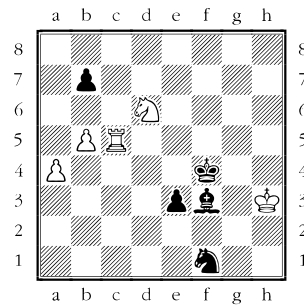
□ ♔c2 □ ♜e6+ □ ♞xb7

2




□ ♜1xe4 □ ♝5xe4 □ ♔f1

6




□ ♜c1 □ a5 □ ♜f5

10




□ ♞xd5 □ ♜f3 □ a3

3




□ ♔g2 □ axb5 □ ♜xf6

7




□ ♜xe7 □ ♜b1 □ ♜xb2

11




□ ♔g7 □ ♜a1 □ ♜a3+

4




□ ♜xd5 □ ♔xe4 □ ♜h5

8




□ ♞xc6 □ ♜xg7+ □ ♜a4

12




□ ♜c1 □ ♜a8 □ ♔f2

13




□ ♔xa6 □ ♖a5 □ ♜b6

17




□ ♖e6 □ ♗h3 □ ♗h4

21



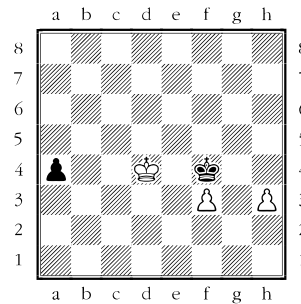
□ g4 □ ♔d3 □ a4

14




□ ♜f1 □ g4 □ ♖h1

18



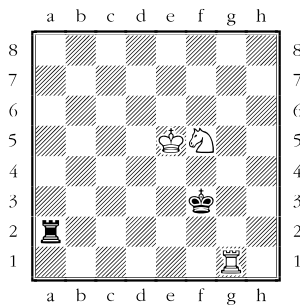
□ ♖c4 □ h4 □ ♖c3

22



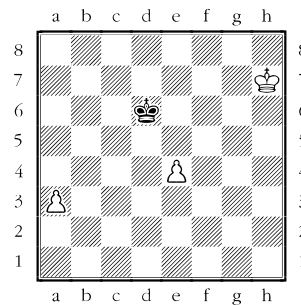
□ h7 □ ♜h4 □ ♖a1

15




□ ♜g3+ □ ♔d4+ □ ♗h4+

19




□ ♖g6 □ ♖g8 □ a4

23




□ ♔xf4 □ a4 □ ♙xf4

16



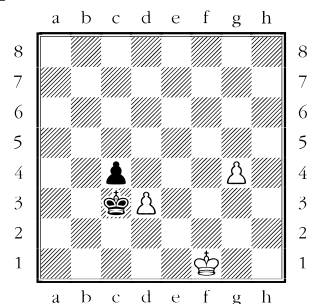
□ ♜e1 □ d3 □ c3

20



□ ♗h5 □ ♜e8 □ ♗a6

24



□ g5 □ dxc4 □ ♖e2